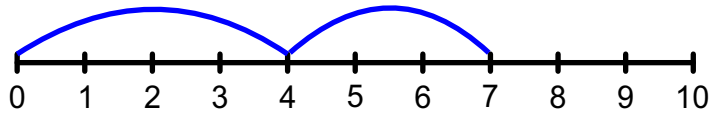


# Number Line Addition

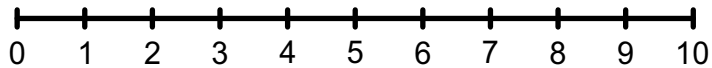
Finish the number sentences. Use the number lines to help.

Example

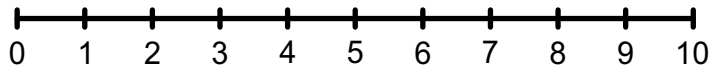
$4 + 3 = \underline{7}$



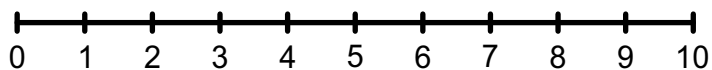
$4 + 1 = \underline{\quad}$



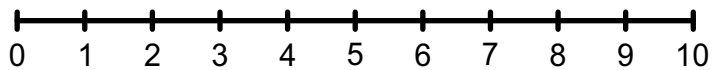
$5 + 3 = \underline{\quad}$



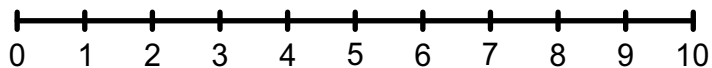
$3 + 2 = \underline{\quad}$



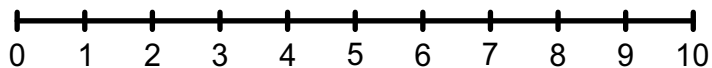
$6 + 3 = \underline{\quad}$



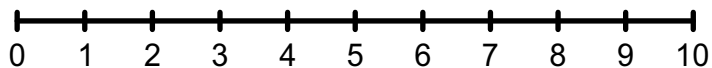
$4 + 5 = \underline{\quad}$



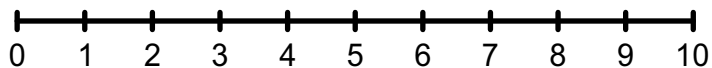
$7 + 2 = \underline{\quad}$



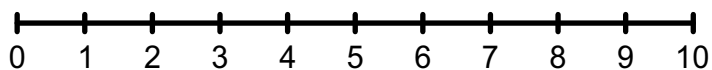
$1 + 6 = \underline{\quad}$



$6 + 4 = \underline{\quad}$



$5 + 3 = \underline{\quad}$



$2 + 6 = \underline{\quad}$

