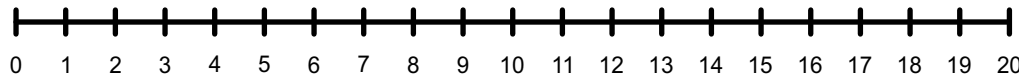


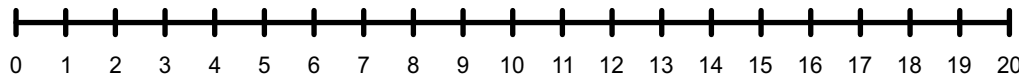
Number Line Addition

Finish the number sentences. Use the number lines to help.

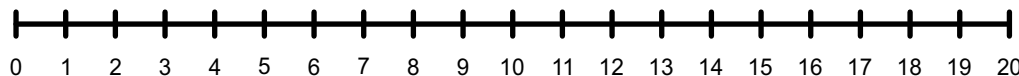
$6 + 5 = \underline{\quad}$



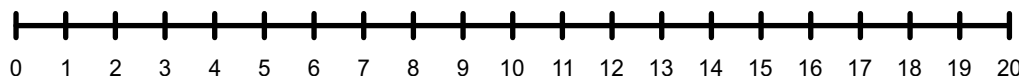
$10 + 4 = \underline{\quad}$



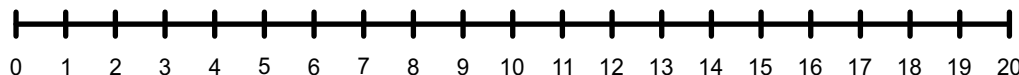
$8 + 6 = \underline{\quad}$



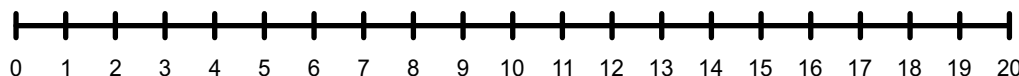
$4 + 7 = \underline{\quad}$



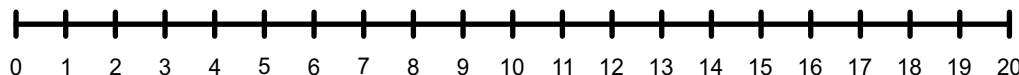
$9 + 8 = \underline{\quad}$



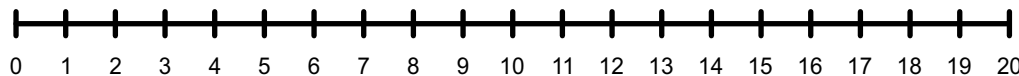
$7 + 7 = \underline{\quad}$



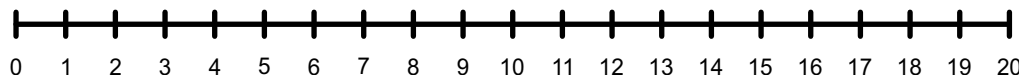
$11 + 4 = \underline{\quad}$



$8 + 10 = \underline{\quad}$



$6 + 6 = \underline{\quad}$



$9 + 9 = \underline{\quad}$

