



# Multiplication

With Arrays

Date: \_\_\_\_\_ Name: \_\_\_\_\_

1. Write a number sentence for each array.


\_\_\_\_\_ × \_\_\_\_\_ = \_\_\_\_\_

\_\_\_\_\_ × \_\_\_\_\_ = \_\_\_\_\_


\_\_\_\_\_ × \_\_\_\_\_ = \_\_\_\_\_

2. Color the boxes to solve the each multiplication.


$1 \times 3 = \underline{\quad}$



$2 \times 7 = \underline{\quad}$



$4 \times 5 = \underline{\quad}$



3. Write the equation that describes how many objects there are.

How many apples are there?

\_\_\_\_\_ × \_\_\_\_\_ = \_\_\_\_\_

How many cherries are there?

\_\_\_\_\_ × \_\_\_\_\_ = \_\_\_\_\_

How many strawberries are there?

\_\_\_\_\_ × \_\_\_\_\_ = \_\_\_\_\_