



Multiplication

With Arrays

Date: _____ Name: _____

1. Write a number sentence for each array.


_____ × _____ = _____

_____ × _____ = _____


_____ × _____ = _____

2. Color the boxes to solve the each multiplication.


$2 \times 2 = \underline{\quad}$



$3 \times 5 = \underline{\quad}$



$6 \times 4 = \underline{\quad}$



3. Write the equation that describes how many objects there are.

How many cherries are there?

_____ × _____ = _____

How many strawberries are there?

_____ × _____ = _____

How many apples are there?

_____ × _____ = _____